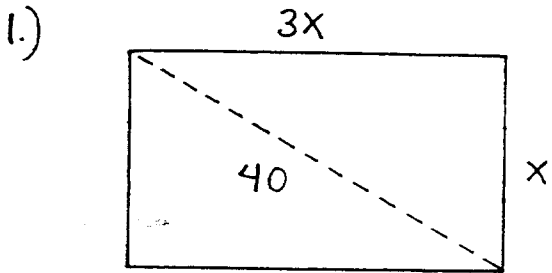


ESP
Kouba
Worksheet 1 Solutions



Pythagorean Theorem :

$$x^2 + (3x)^2 = 40^2 \rightarrow$$

$$x^2 + 9x^2 = 1600 \rightarrow$$

$$10x^2 = 1600 \rightarrow x^2 = 160 \rightarrow x \approx 12.65 \text{ cm.}$$

and $3x \approx 37.95 \text{ cm.}$

2.) a.) $2x - 3 = 17$

b.) $x^2 - 100 = 0$

3.) $A = 6$

4.) $(x + \frac{3}{x})(2x - 5) = (x - \frac{3}{x})(x + 5) \rightarrow$

$$2x^2 - 5x + 6 - \frac{15}{x} = x^2 + 5x - 3 - \frac{15}{x} \rightarrow$$

$$x^2 - 10x + 9 = 0 \rightarrow x = \frac{10 \pm \sqrt{64}}{2} = 9 \text{ or } 1$$

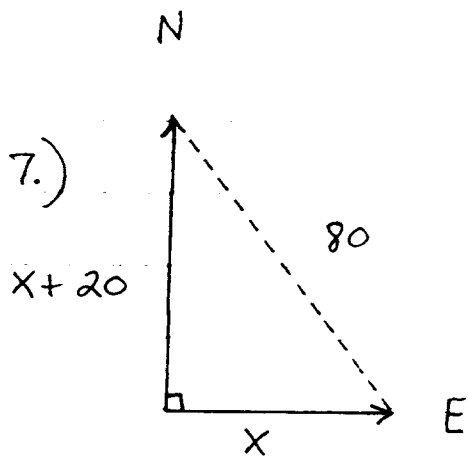
5.) $x + \sqrt{x} = 992 \rightarrow (x - 992)^2 = (-\sqrt{x})^2 \rightarrow$

$$x^2 - 1984x + 984064 = x \rightarrow$$

$$x^2 - 1985x + 984064 = 0 \rightarrow$$

$$x = \frac{1985 \pm \sqrt{3969}}{2} = \cancel{1024} \text{ or } 961$$

NO!



Let x be Juan's speed in miles per hour. In 1 hour Juan has gone $x \cdot 1 = x$ miles, and Denise has gone $(x+20) \cdot 1 = x+20$ miles:

$$(x+20)^2 + x^2 = 80^2 \rightarrow 2x^2 + 40x - 6000 = 0 \rightarrow$$

$$x^2 + 20x - 3000 = 0 \rightarrow$$

$$x = \frac{-20 \pm \sqrt{12400}}{2} = \boxed{45.68 \text{ mph}} \text{ or } \boxed{\cancel{-65.68 \text{ mph}}}$$

so Denise drove about

$$\boxed{65.68 \text{ mph}}$$

No

8.) Let r be radius of smaller circle, then

$$\pi (10)^2 - \pi r^2 = (.75) \pi r^2 \rightarrow$$

$$100\pi = 1.75\pi r^2 \rightarrow$$

$$r^2 = 57.14 \rightarrow \text{area} = \pi r^2 \approx \boxed{57.14 \pi}$$

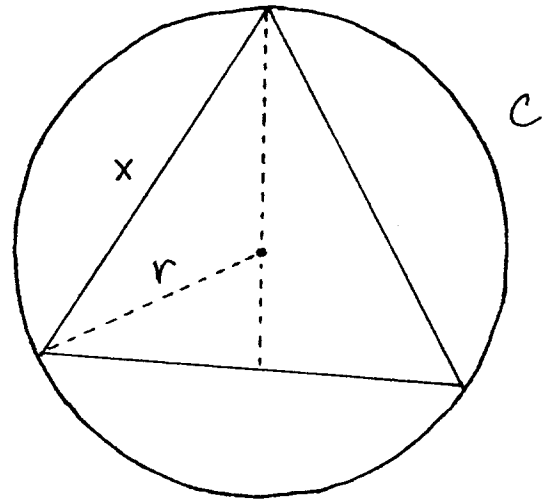
of smaller circle

9.) a) $A = \pi r^2$

b) $C = 2\pi r \rightarrow r = \frac{C}{2\pi}$

so $A = \pi r^2 = \pi \left(\frac{C}{2\pi}\right)^2$

or $A = \frac{1}{4\pi} C^2$

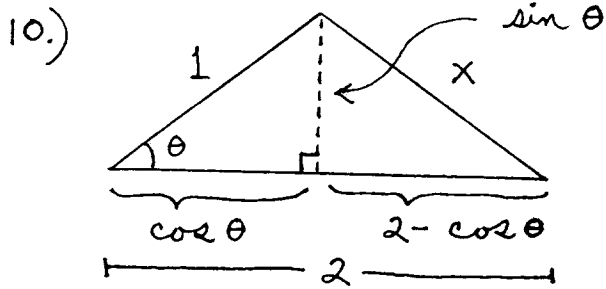
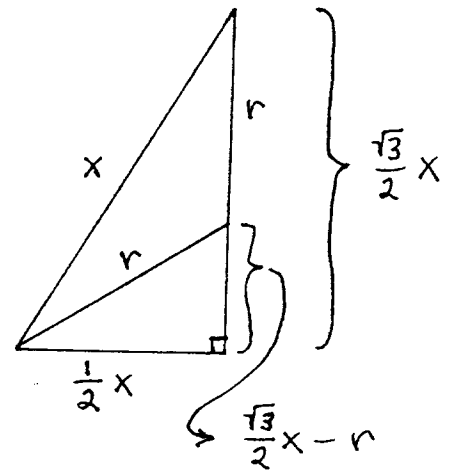


c) $\left(\frac{1}{2}x\right)^2 + \left(\frac{\sqrt{3}}{2}x - r\right)^2 = r^2 \rightarrow$

$\frac{1}{4}x^2 + \frac{3}{4}x^2 - \sqrt{3}rx + r^2 = r^2 \rightarrow$

$r = \frac{1}{\sqrt{3}}x$ so

$A = \pi r^2 = \pi \left(\frac{1}{\sqrt{3}}x\right)^2 = \frac{\pi}{3}x^2$



a.) $A = \frac{1}{2}(\text{base})(\text{height})$
 $= \frac{1}{2}(2)(\sin \theta)$
 $= \sin \theta$

b.) $A = \sin \theta$ and

$(2 - \cos \theta)^2 + (\sin \theta)^2 = x^2 \rightarrow$

$4 - 4\cos \theta + (\cos^2 \theta + \sin^2 \theta) = x^2 \rightarrow 5 - 4\cos \theta = x^2 \rightarrow$

$\cos \theta = \frac{5 - x^2}{4}$; $\cos^2 \theta + \sin^2 \theta = 1 \rightarrow$

$\left(\frac{5 - x^2}{4}\right)^2 + (A)^2 = 1 \rightarrow A = \sqrt{1 - \left(\frac{5 - x^2}{4}\right)^2}$

or $A = \frac{1}{4}(-x^4 + 10x^2 - 9)^{1/2}$

$$11.) \text{ a.) } \sin\left(\frac{\pi}{3}\right) = \frac{\sqrt{3}}{2} \quad \text{b.) } \cos\left(\frac{3\pi}{4}\right) = -\frac{\sqrt{2}}{2}$$

$$\text{c.) } \tan\left(\frac{5\pi}{6}\right) = \frac{\sin\left(\frac{5\pi}{6}\right)}{\cos\left(\frac{5\pi}{6}\right)} = \frac{\frac{1}{2}}{-\frac{\sqrt{3}}{2}} = -\frac{1}{\sqrt{3}}$$

$$\text{d.) } \cot\left(\frac{4\pi}{3}\right) = \frac{\cos\left(\frac{4\pi}{3}\right)}{\sin\left(\frac{4\pi}{3}\right)} = \frac{-\frac{1}{2}}{-\frac{\sqrt{3}}{2}} = \frac{1}{\sqrt{3}}$$

$$\text{e.) } \sec\left(-\frac{7\pi}{6}\right) = \frac{1}{\cos\left(-\frac{7\pi}{6}\right)} = \frac{1}{-\frac{\sqrt{3}}{2}} = -\frac{2}{\sqrt{3}}$$

$$\text{f.) } \csc\left(\frac{7\pi}{4} - 2\pi\right) = \csc\left(-\frac{\pi}{4}\right) = \frac{1}{\sin\left(-\frac{\pi}{4}\right)} = \frac{1}{-\frac{\sqrt{2}}{2}} = -\sqrt{2}$$

$$\text{g.) } \text{Since } \sin 2\theta = 2 \sin \theta \cos \theta,$$

$$\sin\left(\frac{\pi}{8}\right) \cos\left(\frac{\pi}{8}\right) = \frac{1}{2} \sin\left(2 \cdot \frac{\pi}{8}\right) = \frac{1}{2} \sin\left(\frac{\pi}{4}\right) = \frac{1}{2} \cdot \frac{\sqrt{2}}{2} = \frac{\sqrt{2}}{4}$$

$$\text{h.) } \text{Since } \cos 2\theta = 1 - 2 \sin^2 \theta, \sin^2 \theta = \frac{1}{2}(1 - \cos 2\theta),$$

$$\text{so } \sin\left(\frac{\pi}{8}\right) = +\sqrt{\frac{1}{2}(1 - \cos(2 \cdot \frac{\pi}{8}))} = \sqrt{\frac{1}{2}(1 - \frac{\sqrt{2}}{2})} = \frac{\sqrt{2 - \sqrt{2}}}{2}$$

$$\text{i.) } \text{Since } \cos 2\theta = 2 \cos^2 \theta - 1, \cos^2 \theta = \frac{1}{2}(1 + \cos 2\theta),$$

$$\text{so } \cos\left(\frac{\pi}{8}\right) = \sqrt{\frac{1}{2}(1 + \cos(2 \cdot \frac{\pi}{8}))} = \sqrt{\frac{1}{2}(1 + \frac{\sqrt{2}}{2})} = \frac{\sqrt{2 + \sqrt{2}}}{2}$$

$$\text{j.) } \tan 2\theta = \frac{2 \tan \theta}{1 - \tan^2 \theta} \quad \text{so } \tan\left(2 \cdot \frac{\pi}{12}\right) = \frac{2 \tan\left(\frac{\pi}{12}\right)}{1 - \tan^2\left(\frac{\pi}{12}\right)} \rightarrow$$

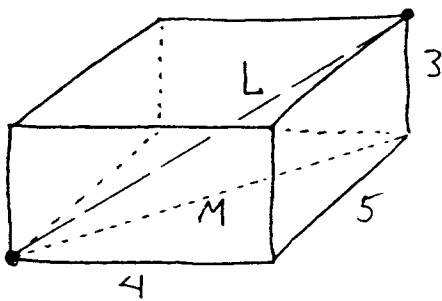
$$\frac{1}{\sqrt{3}} = \frac{2 \tan\left(\frac{\pi}{12}\right)}{1 - \tan^2\left(\frac{\pi}{12}\right)} \rightarrow 1 - \tan^2\left(\frac{\pi}{12}\right) = 2\sqrt{3} \tan\left(\frac{\pi}{12}\right) \rightarrow$$

$$\tan^2\left(\frac{\pi}{12}\right) + 2\sqrt{3}\tan\left(\frac{\pi}{12}\right) - 1 = 0 \rightarrow (\text{quadratic formula})$$

$$\tan\left(\frac{\pi}{12}\right) = \frac{-2\sqrt{3} \pm \sqrt{12 + 4}}{2} = \frac{-2\sqrt{3} \pm 4}{2} = -\sqrt{3} \pm 2$$

$$\text{so } \tan\left(\frac{\pi}{12}\right) = -\sqrt{3} + 2$$

12.)



Determine L :

$$4^2 + 5^2 = M^2 = 41$$

and

$$M^2 + 3^2 = L^2 \text{ so that}$$

$$41 + 9 = L^2 \text{ and}$$

$$L = \sqrt{50} \text{ ft.}$$

13.) $f(x) = \sqrt{x^2 + 9}$ so

$$f(g(x)) = \sqrt{(g(x))^2 + 9} = x - \sqrt{x} \rightarrow$$

$$(g(x))^2 + 9 = (x - \sqrt{x})^2 = x^2 - 2x\sqrt{x} + x \rightarrow$$

$$(g(x))^2 = x^2 - 2x\sqrt{x} + x - 9 \rightarrow$$

$$g(x) = +\sqrt{x^2 - 2x\sqrt{x} + x - 9}$$

or

$$g(x) = -\sqrt{x^2 - 2x\sqrt{x} + x - 9}$$