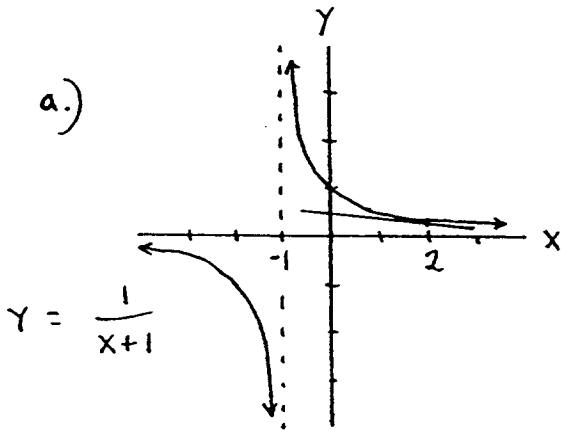


1.) a.)

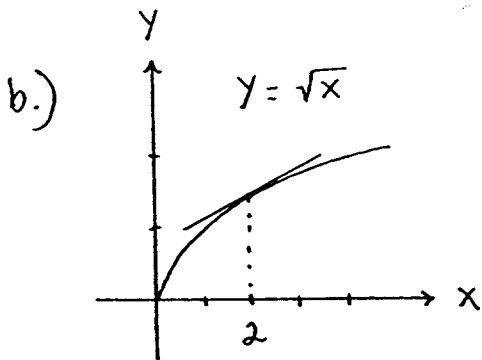


$$\frac{f(2+h) - f(2)}{h} = \frac{\frac{1}{2+h+1} - \frac{1}{3}}{\frac{h}{1}}$$

$$= \frac{3 - (3+h)}{(3+h) \cdot 3} \cdot \frac{1}{h} = \frac{-h}{(3+h) \cdot 3 \cdot h}$$

(Let  $h$  be very small.)

so slope =  $\frac{-1}{(3+0) \cdot 3} = \frac{-1}{9}$ .



$$\frac{f(2+h) - f(2)}{h} = \frac{\sqrt{2+h} - \sqrt{2}}{h}$$

$$= \frac{(\sqrt{2+h} - \sqrt{2}) (\sqrt{2+h} + \sqrt{2})}{h (\sqrt{2+h} + \sqrt{2})}$$

$$= \frac{(2+h) - 2}{h (\sqrt{2+h} + \sqrt{2})} = \frac{h}{h (\sqrt{2+h} + \sqrt{2})}$$

(Let  $h$  be very small.)

so slope =  $\frac{1}{\sqrt{2+0} + \sqrt{2}} = \frac{1}{2\sqrt{2}}$

2.) a.)  $m = \frac{0 - (-\frac{1}{4})}{-1 - \frac{2}{3}} = \frac{\frac{1}{4}}{-\frac{5}{3}} = \frac{1}{4} \cdot \frac{-3}{5} = \frac{-3}{20} \rightarrow$

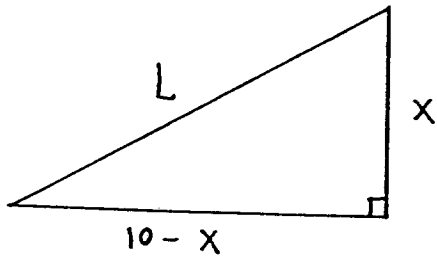
$y = mx + b \rightarrow 0 = \frac{-3}{20}(-1) + b \rightarrow b = \frac{-3}{20}$  so

$$y = \frac{-3}{20}x + \frac{-3}{20}$$

b.)  $x + 2y - 3 = 0 \rightarrow y = -\frac{1}{2}x + \frac{3}{2}$  so  $m = 2 \rightarrow$   
 $y = mx + b \rightarrow 0 = 2(-1) + b \rightarrow b = 2$  and

$$y = 2x + 2$$

3.)



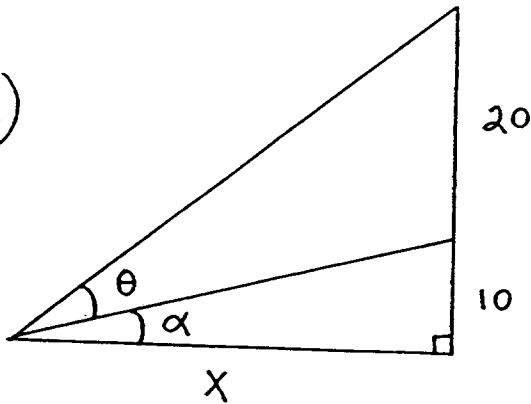
$$L^2 = x^2 + (10-x)^2 \text{ so}$$

$$L = \sqrt{x^2 + (10-x)^2} \text{ and}$$

$$\text{area } A = \frac{1}{2}(10-x)x \text{ and}$$

$$\text{perimeter } P = (10-x) + x + L = 10 + \sqrt{x^2 + (10-x)^2}$$

4.)



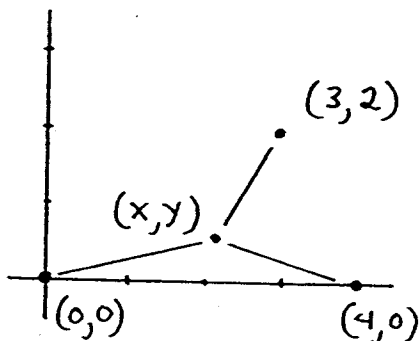
$$\tan \alpha = \frac{10}{x} \rightarrow$$

$$\alpha = \arctan \frac{10}{x} ;$$

$$\tan(\theta + \alpha) = \frac{30}{x} \rightarrow$$

$$\theta + \alpha = \arctan \frac{30}{x} \text{ or } \theta = \arctan \frac{30}{x} - \arctan \frac{10}{x}$$

5.)



The three equal distances are

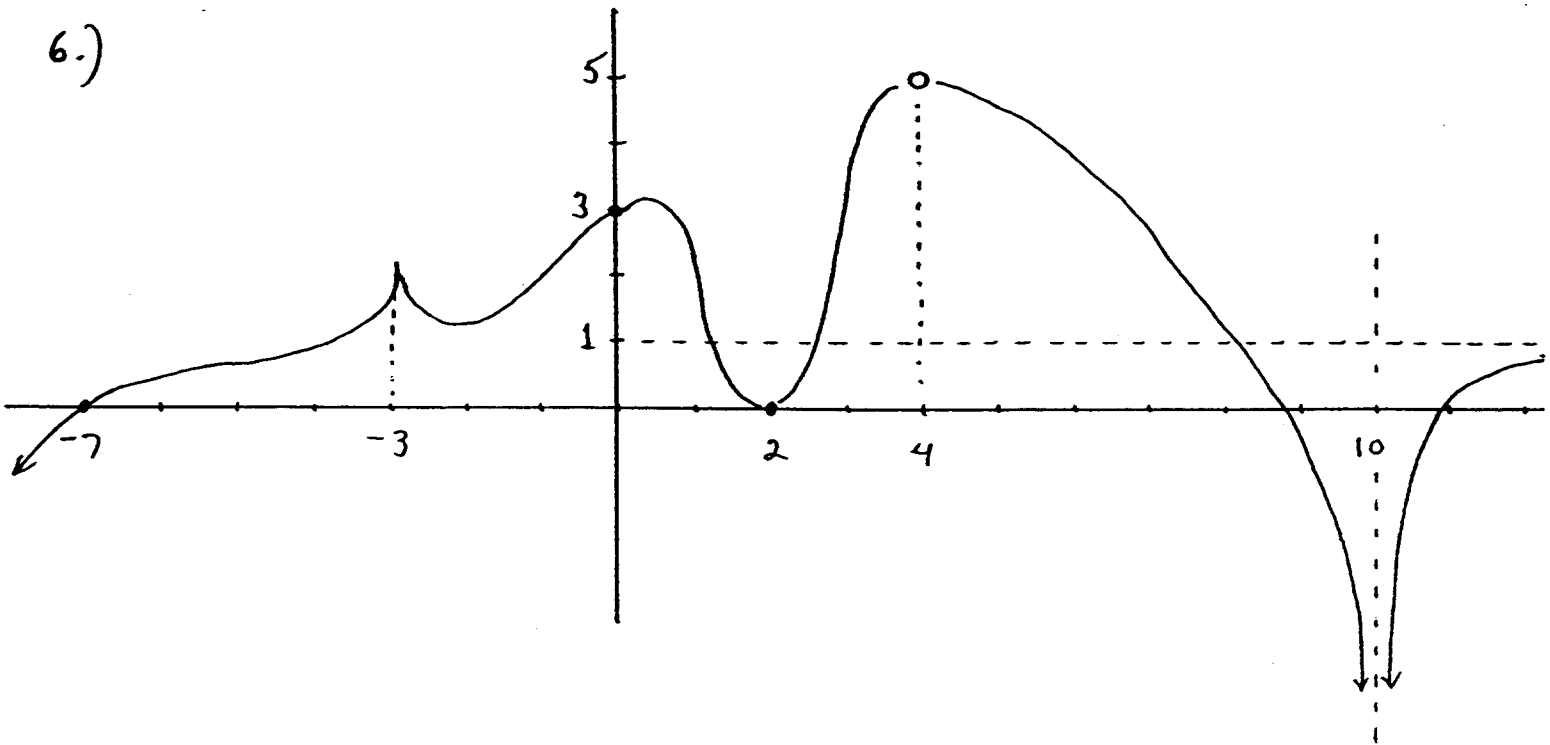
$$\sqrt{(x-0)^2 + (y-0)^2}, \sqrt{(x-3)^2 + (y-2)^2},$$

$$\text{and } \sqrt{(x-4)^2 + (y-0)^2} \rightarrow$$

$$\left. \begin{aligned} (x-0)^2 + (y-0)^2 &= (x-4)^2 + (y-0)^2 \\ (x-0)^2 + (y-0)^2 &= (x-3)^2 + (y-2)^2 \end{aligned} \right\} \begin{aligned} x^2 + y^2 &= x^2 - 8x + 16 + y^2 \\ x^2 + y^2 &= x^2 - 6x + 9 + y^2 - 4y + 4 \end{aligned} \right\}$$

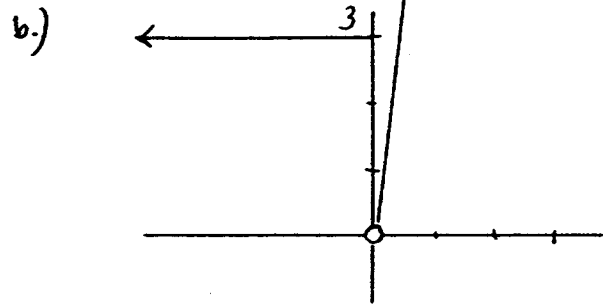
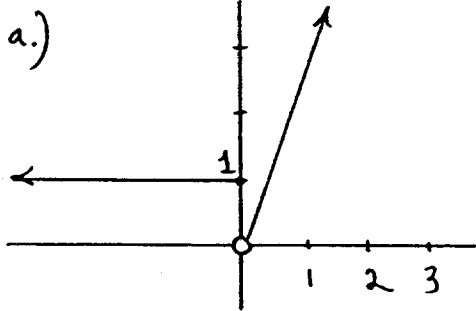
$$\left. \begin{aligned} 8x &= 16 \\ 6x + 4y &= 13 \end{aligned} \right\} x = 2 \text{ and } y = \frac{1}{4}$$

6.)



7.)

$$g(x) = f(f(x)) = \begin{cases} f(1), & x \leq 0 \\ f(3x), & x > 0 \end{cases} = \begin{cases} 3, & x \leq 0 \\ 9x, & x > 0 \end{cases}$$



8.) a.)  $f'(x) = \lim_{h \rightarrow 0} \frac{f(x+h) - f(x)}{h} = \lim_{h \rightarrow 0} \frac{7-7}{h} = \lim_{h \rightarrow 0} 0 = 0$

b.)  $f'(x) = \lim_{h \rightarrow 0} \frac{f(x+h) - f(x)}{h} = \lim_{h \rightarrow 0} \frac{\{3(x+h) + \frac{2}{3}\} - \{3x + \frac{2}{3}\}}{h}$   
 $= \lim_{h \rightarrow 0} \frac{3h}{h} = 3$

$$\begin{aligned}
c.) \quad f'(x) &= \lim_{h \rightarrow 0} \frac{f(x+h) - f(x)}{h} \\
&= \lim_{h \rightarrow 0} \frac{\{(x+h) + (x+h+3)^2\} - \{x + (x+3)^2\}}{h} \\
&= \lim_{h \rightarrow 0} \frac{x+h + \cancel{x^2} + h^2 + 2xh + \cancel{6x} + 6h + 9 - \cancel{x} - \cancel{x^2} - \cancel{6x} - 9}{h} \\
&= \lim_{h \rightarrow 0} \frac{h(1+h+2x+6)}{h} = 2x+7
\end{aligned}$$

$$\begin{aligned}
d.) \quad f'(x) &= \lim_{h \rightarrow 0} \frac{f(x+h) - f(x)}{h} \\
&= \lim_{h \rightarrow 0} \frac{\{(x+h)^2 + \frac{5}{x+h}\} - \{x^2 + \frac{5}{x}\}}{h} \\
&= \lim_{h \rightarrow 0} \left\{ \frac{\cancel{x^2} + 2xh + h^2 - \cancel{x^2}}{h} + \frac{\frac{5}{x+h} - \frac{5}{x}}{h} \right\} \\
&= \lim_{h \rightarrow 0} \left\{ \frac{h(2x+h)}{h} + \frac{\cancel{5x} - \cancel{5x} - 5h}{(x+h)x h} \right\} \\
&= \lim_{h \rightarrow 0} \left\{ (2x+h) - \frac{5}{(x+h)x} \right\} = 2x - \frac{5}{x^2}
\end{aligned}$$

$$\begin{aligned}
e.) \quad f'(x) &= \lim_{h \rightarrow 0} \frac{f(x+h) - f(x)}{h} \\
&= \lim_{h \rightarrow 0} \frac{(x+h)^2 \sin(x+h) - x^2 \sin x}{h} \\
&= \lim_{h \rightarrow 0} \frac{(x^2 + 2xh + h^2)(\sin x \cosh + \cos x \sinh) - x^2 \sin x}{h}
\end{aligned}$$

$$= \lim_{h \rightarrow 0} \frac{x^2 \sin x \cosh h + x^2 \cos x \sinh h + 2xh \sin x \cosh h + 2xh \cos x \sinh h + h^2 \sin x \cosh h + h^2 \cos x \sinh h - x^2 \sin x}{h}$$

$$= \lim_{h \rightarrow 0} \left\{ x^2 \sin x \frac{(\cosh h - 1)}{h} + x^2 \cos x \frac{\sinh h}{h} + \frac{h (2x \sin x \cosh h + 2x \cos x \sinh h + h \sin x \cosh h + h \cos x \sinh h)}{h} \right\}$$

$$= x^2 \sin x \cdot (0) + x^2 \cos x \cdot (1) + 2x \sin x \cdot (0) + 2x \cos x \cdot (0) + 0 + 0 = x^2 \cos x + 2x \sin x$$

$$f.) f'(x) = \lim_{h \rightarrow 0} \frac{f(x+h) - f(x)}{h} = \lim_{h \rightarrow 0} \frac{\sqrt{1+\sqrt{x+h}} - \sqrt{1+\sqrt{x}}}{h}$$

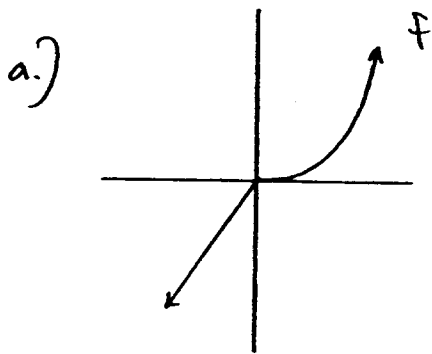
$$= \lim_{h \rightarrow 0} \frac{\sqrt{1+\sqrt{x+h}} - \sqrt{1+\sqrt{x}}}{h} \cdot \frac{\sqrt{1+\sqrt{x+h}} + \sqrt{1+\sqrt{x}}}{\sqrt{1+\sqrt{x+h}} + \sqrt{1+\sqrt{x}}}$$

$$= \lim_{h \rightarrow 0} \frac{(x + \sqrt{x+h}) - (x + \sqrt{x})}{h(\sqrt{1+\sqrt{x+h}} + \sqrt{1+\sqrt{x}})} \cdot \frac{\sqrt{x+h} + \sqrt{x}}{\sqrt{x+h} + \sqrt{x}}$$

$$= \lim_{h \rightarrow 0} \frac{(x+h) - x}{h(\sqrt{1+\sqrt{x+h}} + \sqrt{1+\sqrt{x}})(\sqrt{x+h} + \sqrt{x})}$$

$$= \lim_{h \rightarrow 0} \frac{1}{(\sqrt{1+\sqrt{x+h}} + \sqrt{1+\sqrt{x}})(\sqrt{x+h} + \sqrt{x})} = \frac{1}{2\sqrt{1+\sqrt{x}} \cdot 2\sqrt{x}}$$

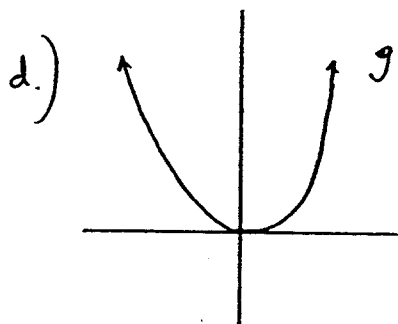
$$9.) f(x) = \begin{cases} x^2 & \text{for } x > 0 \\ x & \text{for } x \leq 0 \end{cases}, \quad g(x) = \begin{cases} x^4 & \text{for } x > 0 \\ x^2 & \text{for } x \leq 0 \end{cases}$$



b.) Yes, since  $\lim_{x \rightarrow 0} f(x) = f(0)$

c.) No, since

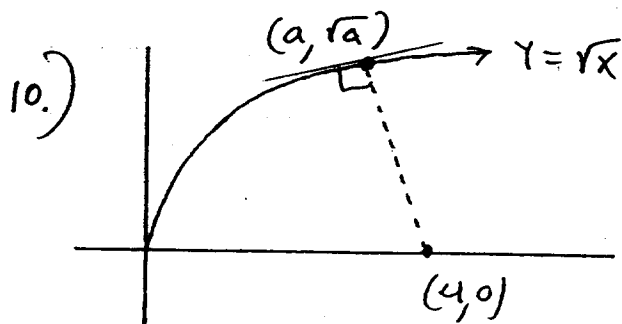
$$f'(0) = \lim_{h \rightarrow 0} \frac{f(0+h) - f(0)}{h} = \lim_{h \rightarrow 0} \frac{f(h)}{h} \text{ does not exist.}$$



e.) Yes, since  $\lim_{x \rightarrow 0} g(x) = g(0)$

f.) Yes, since

$$g'(0) = \lim_{h \rightarrow 0} \frac{g(0+h) - g(0)}{h} = \lim_{h \rightarrow 0} \frac{g(h)}{h} = 0$$



Slope of tangent line at  $x = a$  is

$$f'(a) = \frac{1}{2\sqrt{a}} \text{ so}$$

path of projectile has slope

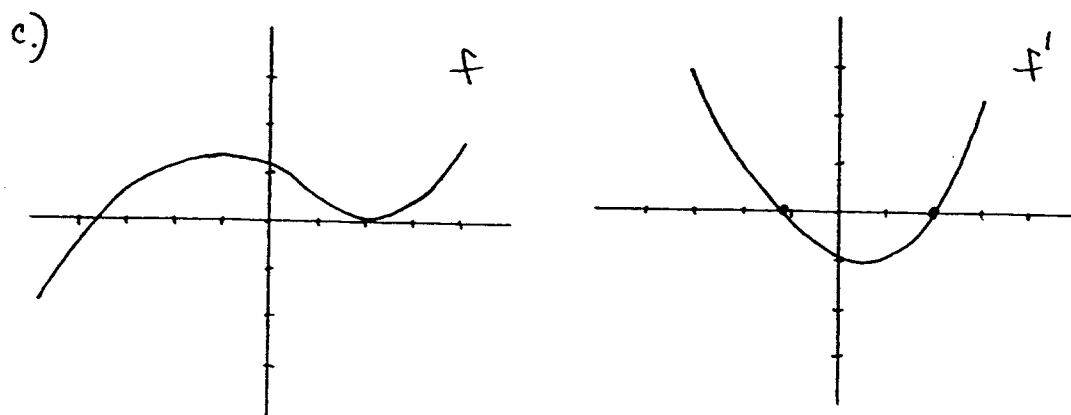
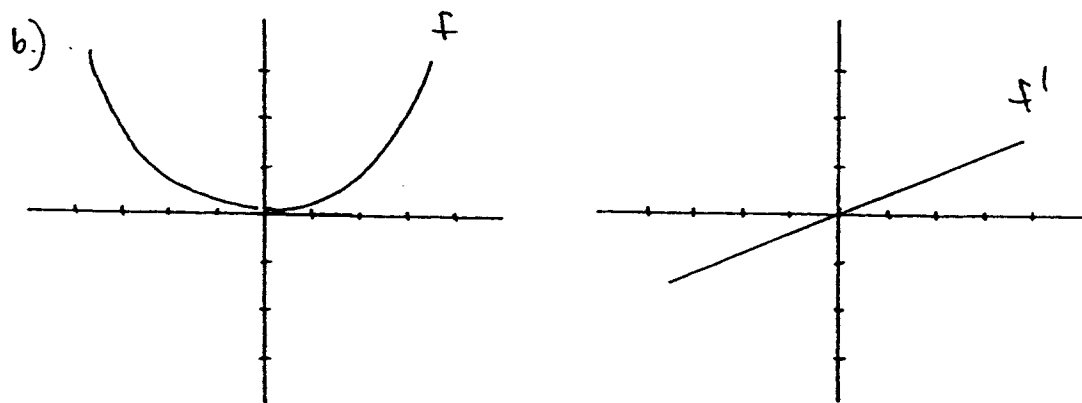
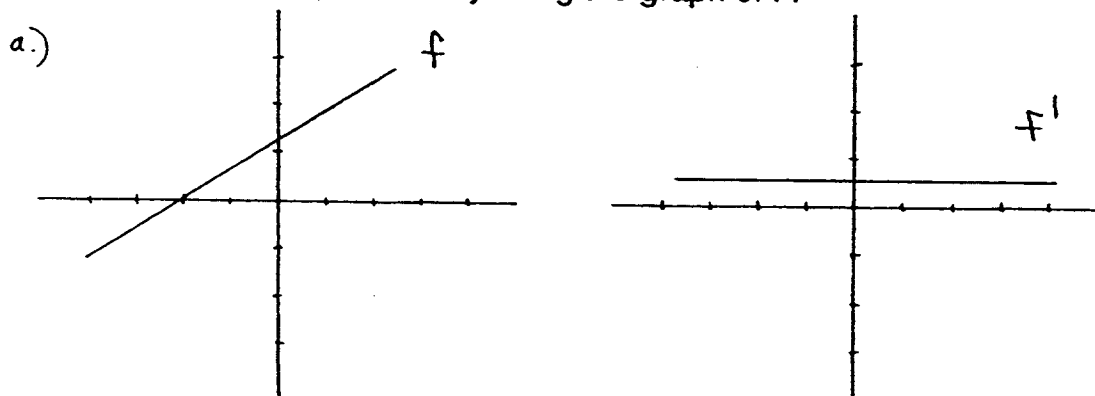
$$\text{and } \left. \begin{array}{l} \text{i.) } -2\sqrt{a} \\ \text{ii.) } \frac{\sqrt{a} - 0}{a - 4} \end{array} \right\} \Rightarrow \frac{\sqrt{a}}{a - 4} = -2\sqrt{a} \Rightarrow$$

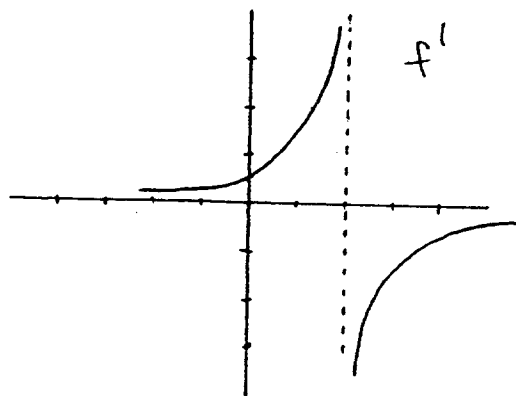
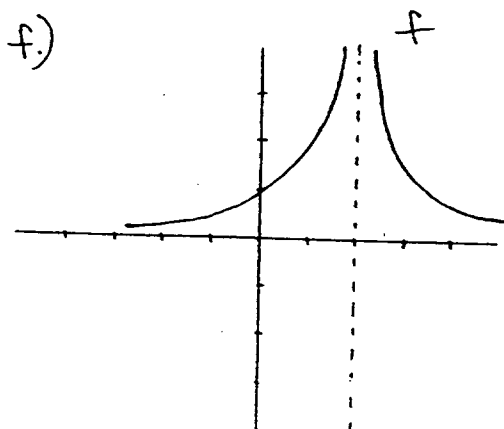
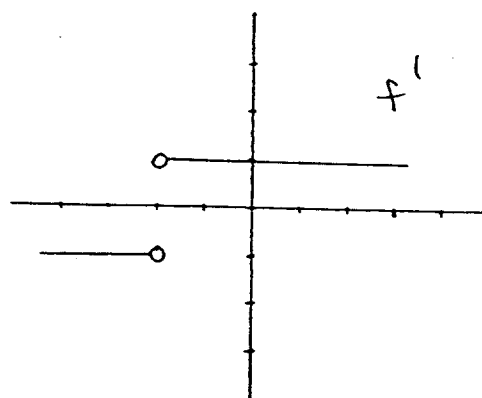
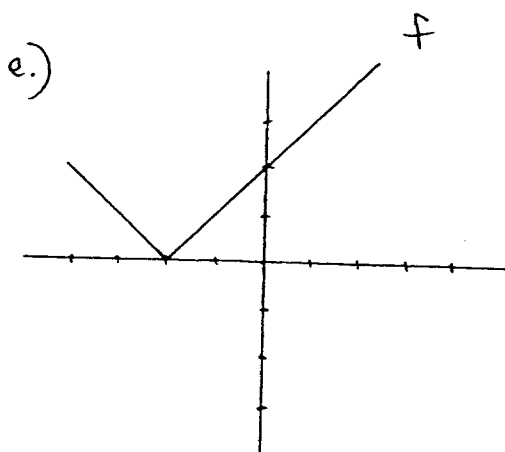
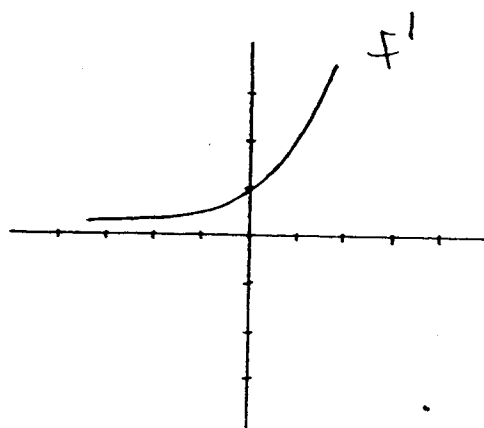
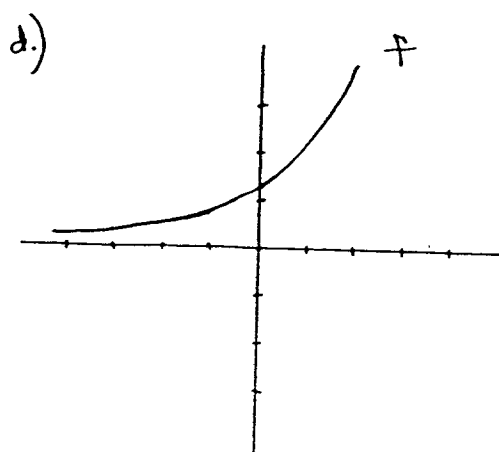
$$\sqrt{a} = -2a^{3/2} + 8\sqrt{a} \Rightarrow 2a^{3/2} - 7\sqrt{a} = 0 \Rightarrow$$

$$\sqrt{a}(2a - 7) = 0 \Rightarrow a = 0 \text{ or } a = \frac{7}{2} \text{ so}$$

points are  $(0, 0)$  and  $(\frac{7}{2}, \sqrt{\frac{7}{2}})$ .

11.) Sketch a rough graph of  $f'$  by using the graph of  $f$ .





12.) 
$$x^2 - xy + y^2 \geq xy \iff x^2 - 2xy + y^2 \geq 0$$

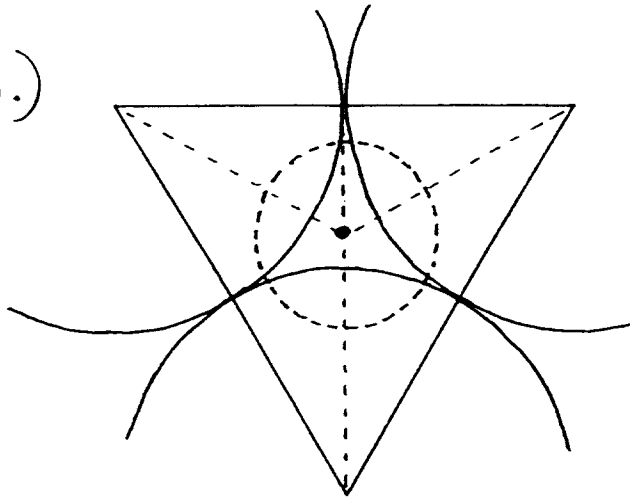
$$\iff (x - y)^2 \geq 0$$

for all values of  $x$  and  $y$ .

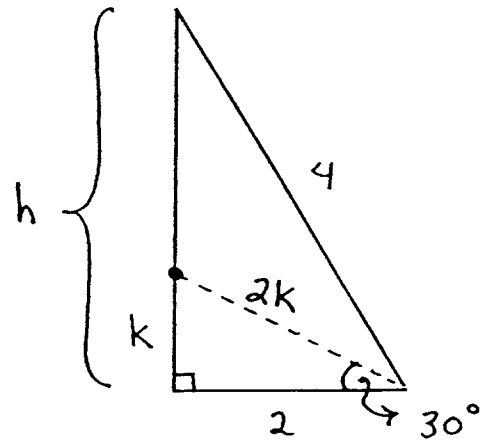
TRUE !



13.)



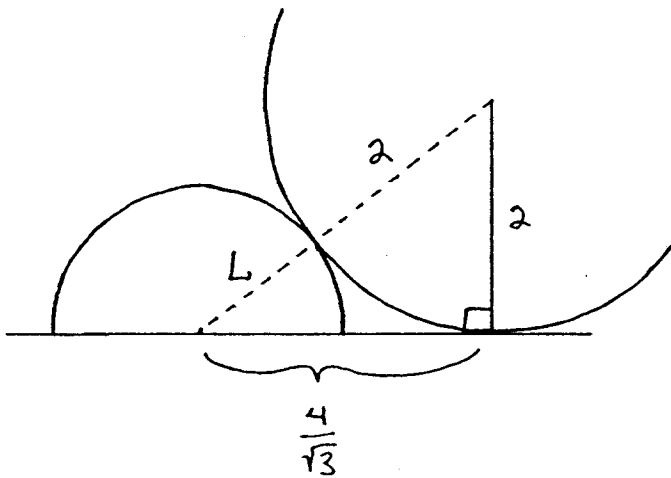
Top View



$$h^2 + 2^2 = 4^2 \rightarrow h^2 = 12 \rightarrow h = 2\sqrt{3}$$

$$k^2 + 2^2 = (2k)^2 \rightarrow k^2 + 4 = 4k^2 \rightarrow 4 = 3k^2 \rightarrow$$

$$k = \frac{2}{\sqrt{3}} \text{ then } h - k = 2\sqrt{3} - \frac{2}{\sqrt{3}} = \frac{4}{\sqrt{3}}$$



Side View

$$(L+2)^2 = \left(\frac{4}{\sqrt{3}}\right)^2 + 2^2 \rightarrow$$

$$(L+2)^2 = \frac{16}{3} + \frac{12}{3} \rightarrow$$

$$L+2 = \sqrt{\frac{28}{3}} \rightarrow$$

$$L = \sqrt{\frac{28}{3}} - 2 \approx 1.055$$