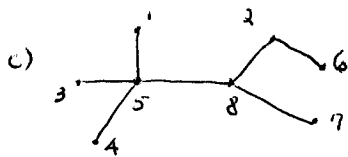
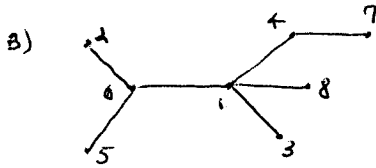
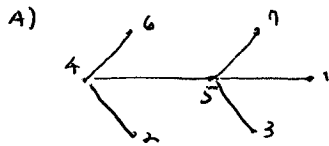


① FIND THE PÄUFER CODE FOR EACH OF THE FOLLOWING TREES:



② CONSTRUCT A TREE CORRESPONDING TO EACH OF THE FOLLOWING PÄUFER CODES:

A) 633526

B) 5143282

③ CONSTRUCT A MINIMUM-WEIGHT SPANNING TREE FOR THE GRAPH BELOW

A) USING KRUSKAL'S ALGORITHM.

B) USING PRIM'S ALGORITHM (STARTING AT J).

